


Name: \_\_\_\_\_ Class: \_\_\_\_\_ Date: \_\_\_\_\_

## Revision 2

1 Colour.

- (a) The 4th flower from the right.  
 (b) The 7th bee from the left.



2 Ravi is eighth in a queue.  
 How many people are there in front of him?



There are  people in front of him.

### 3 Match.

nineteen



twenty




thirteen



twelve



fifteen



13



15



20



12




19

4 Count.


Compare using **more** or **fewer**.

Group A



buttons

Group B



buttons

(a) Group A has  buttons than Group B.

(b) Group B has  buttons than Group A.

5 Write the missing number.

$$\text{bow} + \text{bow} = 10$$

$$\text{bow} - 2 = 3$$

$$\text{bow} = \square$$

6



There are 10 squirrels. 5 squirrels run away.  
How many squirrels are left?

$$\square \bigcirc \square = \square$$


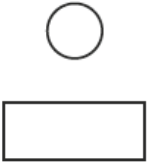





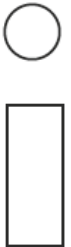
squirrels are left.

- 7 Colour the shapes that you see.  
Use a different colour for each shape.  
Name the shapes.



There is a  and a .

8 Colour the shape that comes next.

- 9** A, B and C are bamboo poles.  
 A is longer than B.  
 C is longer than B.  
 C is shorter than A.

Write the missing letters.








- 10** Write the missing numbers.

Bat



Screwdriver



Key



(a) The bat is about  screwdrivers long.

(b) The screwdriver is about  keys long.

(c) The bat is about  keys long.