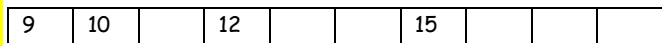
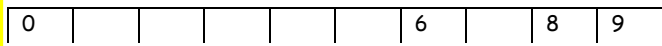
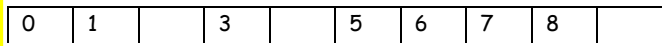
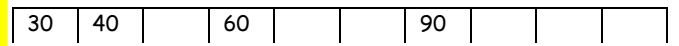
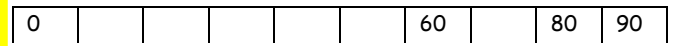
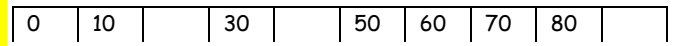


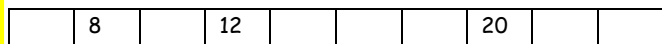
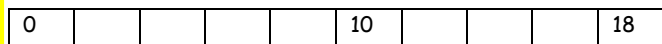
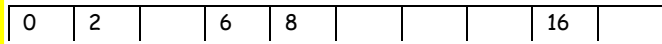
Do Complete the number line



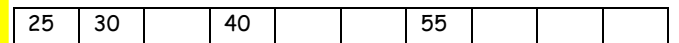
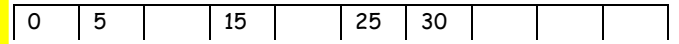
Do Complete the number line



Do Complete the number line



Do Complete the number line



Do

Put the correct letters in the boxes to complete the sequence.

- A) two
- B) ten
- C) twelve

4	6	8		
---	---	---	--	--

Do

Put the correct letters in the boxes to complete the sequence.

- A) forty
- B) fifty
- C) five

10	20	30		
----	----	----	--	--

Do

Circle the number that does not fit the pattern.

- a) 4, 6, 8, 9, 10, 12, 14
- b) 40, 30, 20, 10, 5, 0
- c) 10, 20, 30, 35, 40, 50

Do

Create your own sequence counting in 10s.

Choose what number you are going to start at.

Think

True or false.

If I counted in 5s from 0, I would land on 45.

Think

What's the same and what's different?

0, 5, 10, 15, 20

0, 10, 20, 40, 50