

Name: _____ Class: _____ Date: _____

Worksheet 11

Measuring Perimeters in Different Units

1 Measure and find the perimeter of each figure.

(a)



$$\begin{aligned} \text{Perimeter} &= \boxed{} \text{ cm} \\ &= \boxed{} \text{ mm} \end{aligned}$$

(b)




$$\begin{aligned} \text{Perimeter} &= \boxed{} \text{ cm} \\ &= \boxed{} \text{ mm} \end{aligned}$$

(c)



$$\begin{aligned} \text{Perimeter} &= \boxed{} \text{ cm} \\ &= \boxed{} \text{ mm} \end{aligned}$$

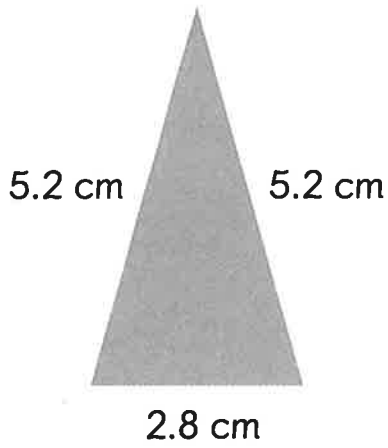
(d)



$$\begin{aligned} \text{Perimeter} &= \boxed{} \text{ cm} \\ &= \boxed{} \text{ mm} \end{aligned}$$


2 Find the perimeter of each figure in mm.

(a)




Perimeter = mm

(b)



Perimeter = mm

(c)



Perimeter = mm